

Le Frazioni

1 Cosa vuol dire **Frazionare**?

.....

2 Che cosa indica il **numeratore** in una frazione?

.....

3 Che cosa indica il **denominatore** in una frazione?

.....

4 A cosa serve la **linea di frazione**?

.....

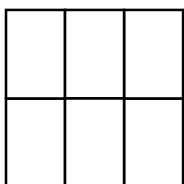
5 Cerchia il **numeratore** nelle seguenti frazioni

$$\frac{3}{4} \quad \frac{5}{7} \quad \frac{6}{12} \quad \frac{3}{13} \quad \frac{8}{14} \quad \frac{10}{30}$$


6 Cerchia il **denominatore** nelle seguenti frazioni

$$\frac{6}{8} \quad \frac{5}{25} \quad \frac{1}{2} \quad \frac{9}{18} \quad \frac{4}{4} \quad \frac{10}{32}$$

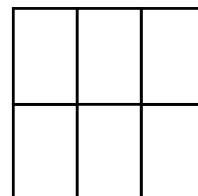
7 Colora l'intero come indicato dalla frazione



$$\frac{4}{6}$$

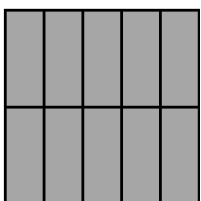



$$\frac{1}{3}$$

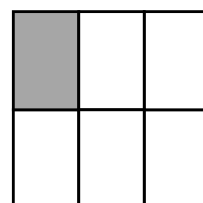


$$\frac{2}{6}$$

8 Scrivi la frazione corrispondente alla figura

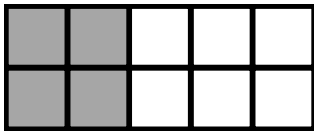




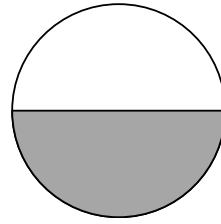


Le Frazioni


1 Cerchia la frazione corrispondente alla figura



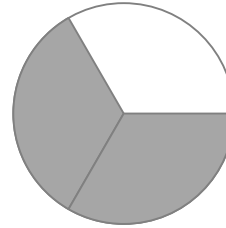
$$\frac{5}{10} \quad \frac{4}{10} \quad \frac{4}{9}$$



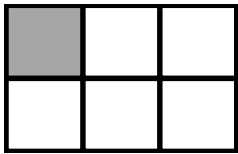
$$\frac{1}{2} \quad \frac{2}{2} \quad \frac{1}{1}$$



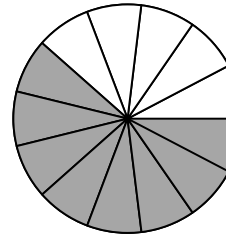
$$\frac{3}{4} \quad \frac{2}{3} \quad \frac{3}{3}$$



$$\frac{2}{2} \quad \frac{3}{2} \quad \frac{2}{3}$$



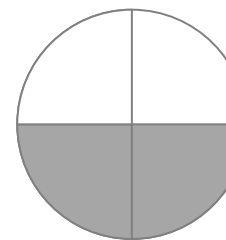
$$\frac{5}{5} \quad \frac{1}{6} \quad \frac{1}{5}$$




$$\frac{10}{13} \quad \frac{13}{13} \quad \frac{8}{13}$$



$$\frac{4}{8} \quad \frac{5}{8} \quad \frac{4}{4}$$



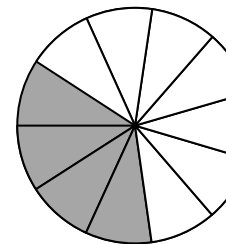
$$\frac{2}{5} \quad \frac{2}{4} \quad \frac{3}{4}$$



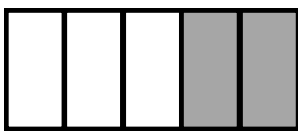
$$\frac{5}{7} \quad \frac{8}{5} \quad \frac{5}{8}$$



$$\frac{8}{3} \quad \frac{3}{8} \quad \frac{4}{8}$$



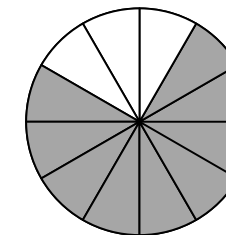
$$\frac{11}{4} \quad \frac{4}{11} \quad \frac{4}{12}$$




$$\frac{2}{6} \quad \frac{6}{2} \quad \frac{2}{5}$$



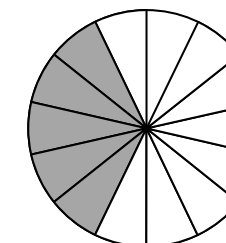
$$\frac{6}{2} \quad \frac{3}{6} \quad \frac{2}{6}$$



$$\frac{9}{12} \quad \frac{8}{12} \quad \frac{12}{9}$$



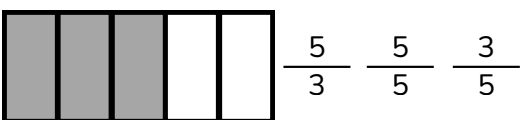
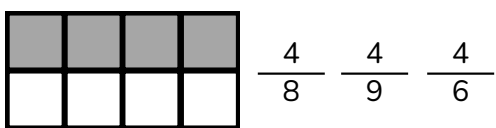
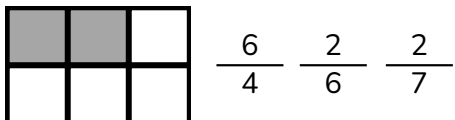
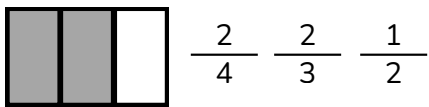
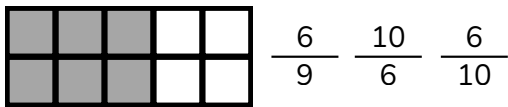
$$\frac{1}{1} \quad \frac{1}{2} \quad \frac{2}{2}$$




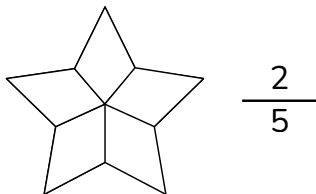
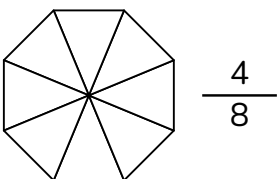
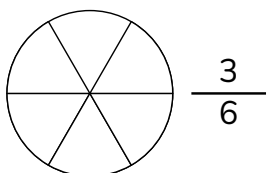
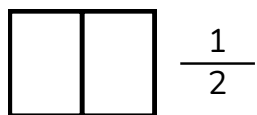
$$\frac{6}{14} \quad \frac{5}{14} \quad \frac{4}{14}$$

Le Frazioni

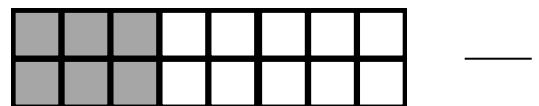
1 Cerchia la frazione corrispondente alla figura.



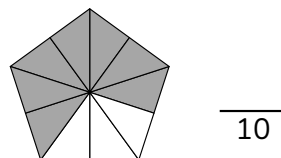
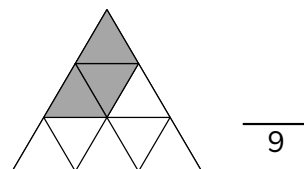
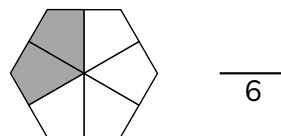
2 Colora ogni figura per rappresentare la frazione data.



3 Scrivi la frazione corrispondente.



4 Scrivi il numeratore della frazione.



5 Scrivi il denominatore della frazione.

